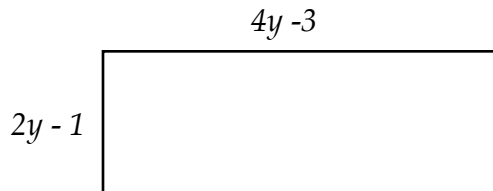


Steps to solution of equations

Problem 1

Perimeter = 44 "

Find the area



Do you have enough information to solve the problem ? yes no

Would a picture/diagram help ?

Set up the variables

Set up the expression/equation

Simplify (combine like terms)

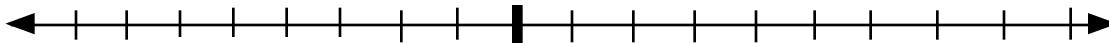
Solve the equation

~ whatever you do to one side you must do to the other
~ constant then coefficient

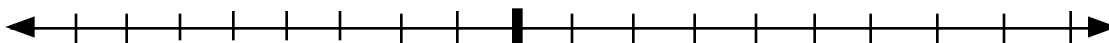
Answer the question

2 Simplify $4^2 - 2 \times 3 \div 2 - (4^2 - 2^3) - 3 \times 2^3$

3 $3c + 5 \geq 14$ Solve and graph



4 $-5m + 2 < -8$



Warm-up # 14
J Allyn

Name _____